

# Badsley Primary School

## Home Learning – Weekly Overview



<b>Year Group:</b>	<b>Y3</b>	<b>Week Commencing:</b>	<b>29<sup>th</sup> June 2020</b>
--------------------	-----------	-------------------------	----------------------------------

Home Learning	Where could you find this? Website and documents to support you.
<p><b>Reading:</b> Children should continue to read high quality texts through this time of uncertainty. A range of audio books are available for free on <b>Audible</b>. Oxford Owl has a selection of free e-books to read if you create a free account with them. Also, David Walliams has been reading short stories every day.</p>	<p><a href="http://www.stories.audible.com/start-listen">www.stories.audible.com/start-listen</a>  <a href="https://www.worldofdavidwalliams.com/elevenses-catch-up/">https://www.worldofdavidwalliams.com/elevenses-catch-up/</a>  <a href="https://www.oxfordowl.co.uk/">https://www.oxfordowl.co.uk/</a></p> <p>The file (Y3 Activity Booklet) which can be found on the website to this document has several reading comprehension activities to be completed. Remember, if you don't have a printer, please write the sentences/answers out in the books provided in your original home learning pack.</p>
<p><b>Maths</b> To continue to develop our work on <b>ANGLES, SHAPE AND TIME</b>, you can access learning resources at <b>White Rose Maths – Home Learning</b>. <b>BBC Bitesize</b> is also delivering online lessons linked to the same curriculum followed in school. Use <b>TT Rockstars</b> to practise times tables.</p>	<p><a href="https://whiterosemaths.com/homelearning/year-3/">https://whiterosemaths.com/homelearning/year-3/</a>  <a href="https://ttrockstars.com/">https://ttrockstars.com/</a>  <a href="http://www.bbc.co.uk">www.bbc.co.uk</a></p> <p>?</p>

Get ready for your challenges!! Keep a look out on the website and twitter!! Points mean prizes so have a go at as many as you can. We are all looking forward to see what you have been up to this week!! Follow the link on the school website for the Badsley Healthy Heroes week.

Stay safe and hope to see you all soon.

The whole Y3 team

**SECTION A**

**1**  $2 \times \square = 8$

**2**  $15 \div \square = 3$

**3**  $4 \times \square = 20$

**4**  $8 \div \square = 8$

**SECTION B**

**1**  $8 \times \square = 88$

**2**  $\square \div 4 = 12$

**3**  $36 \div \square = 3$

**4**  $32 = \square \times 2$

**SECTION C**

**1**  $64 = 4 \times \square$

**2**  $\square \div 4 = 14$

**3**  $4 \times \square \times 2 = 64$

**4**  $\square \div 8 = 16$

## Find 10 more or less than a given number

1 Solve the following.

a 10 more than 80 =

b 10 more than 64 =

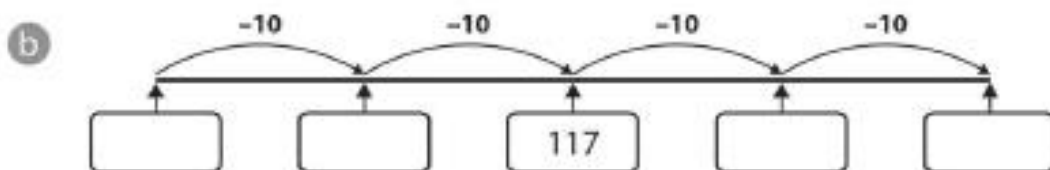
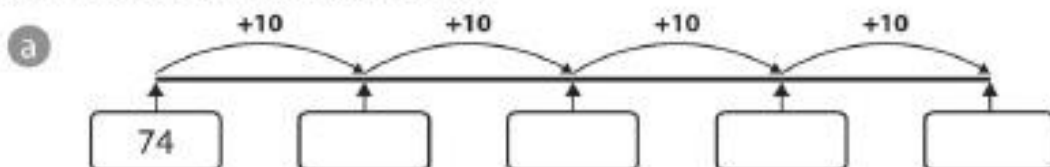
c 10 less than 100 =

d 10 more than 474 =

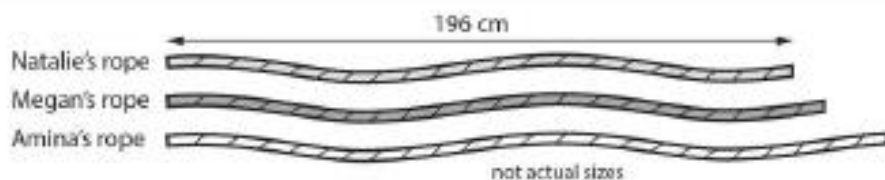
e 10 less than 156 =



2 Complete the number lines below.



3



a Megan's rope is **10 cm** longer than Natalie's rope.  
How long is Megan's rope?  cm

b Amina's rope is **20 cm** longer than Megan's rope.  
How long is Amina's rope?  cm

c Amina cuts **10 cm** off her rope.  
How long is it now?  cm

## BABY BEAR IN FAIRYTALE LAND

Baby Bear has just gone for a walk. See if you can work out the names of all the characters he talks about.



This is where I live with my mum and dad. Maybe you heard about the burglar who ate our porridge and



broke my chair. When we went for a ramble in the woods, we met an oinking thing collecting sticks for his house. He said there were no bricks left. Round the corner, there was a hairy character with sharp teeth. He was out of breath. He complained about not being able to find Grandma's house. I don't know whose grandma. Down by the river, we crossed the bridge. Some ugly creature appeared and got into a rage about three animals making a terrible noise on its bridge. It went off when it saw the size of my dad. That's where I found the glass slipper. Mum has seen a young, cleaning woman in the village. Maybe it belongs to her. As our house came into view, a boy was in the middle of the path, swapping a cow for a bag of beans. I told him I didn't think it was worth it. When I entered our house, I was hoping my porridge would be cool. In fact, I was hoping it would still be there!

1 Who was the **burglar** that Baby Bear mentioned?



---

2 He met an **oinking thing**. Which fairytale does it belong to?

---

---

3 Who is the **hairy character with sharp teeth**?

---

4 Why was the hairy character with sharp teeth out of breath?

---

---

5 Baby Bear didn't know whose **Grandma** was being talked about. Whose grandma was she?

---

6 Who was the **ugly creature** Baby Bear met at the bridge?

---

7 Who were the **animals making a terrible noise on its bridge**?

---

8 Who was the **young, cleaning woman in the village**?

---

9 Baby Bear saw a boy with a cow. What fairytale is he in?

---